

Name: _____

Skip Counting by 2's

Directions: Fill in the hundreds chart by skip counting.

1		3		5		7		9	
11		13		15		17		19	
21		23		25		27		29	
31		33		35		37		39	
41		43		45		47		49	
51		53		55		57		59	
61		63		65		67		69	
71		73		75		77		79	
81		83		85		87		89	
91		93		95		97		99	

$2 \times 1 =$

$2 \times 2 =$

$2 \times 3 =$

$2 \times 4 =$

$2 \times 5 =$

$2 \times 6 =$

$2 \times 7 =$

$2 \times 8 =$

$2 \times 9 =$

$2 \times 10 =$

1. Color

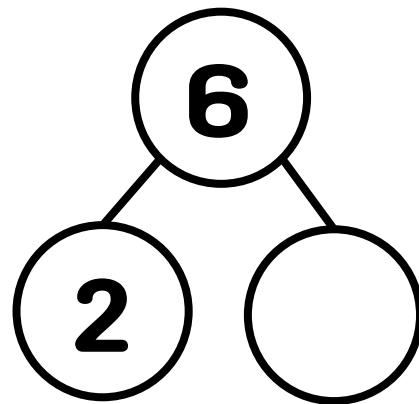
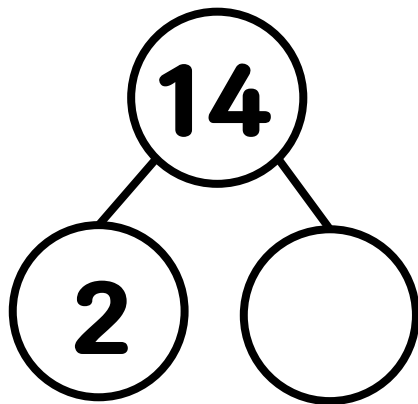
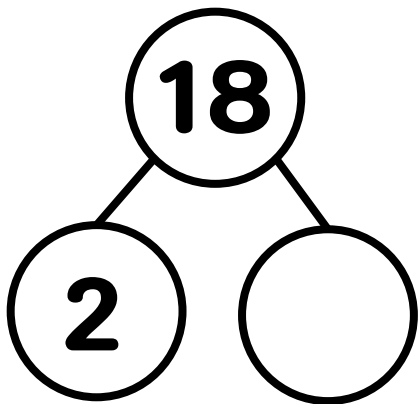
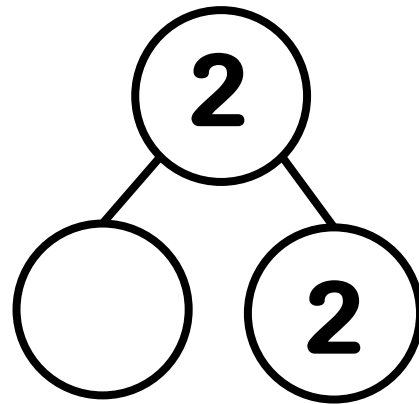
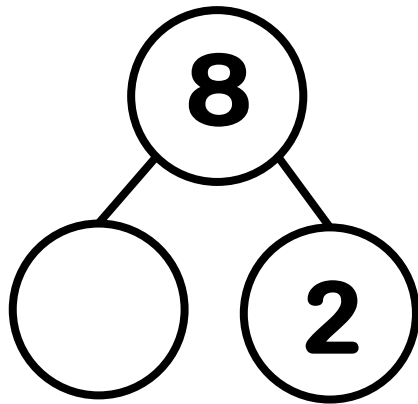
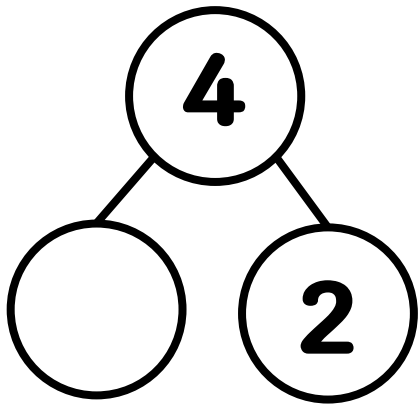
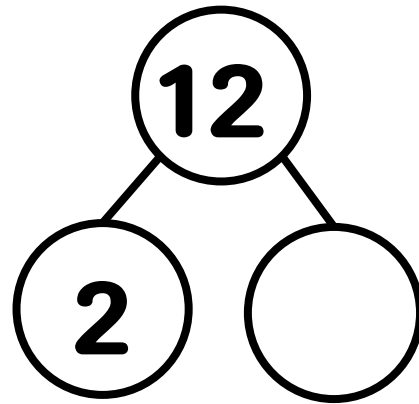
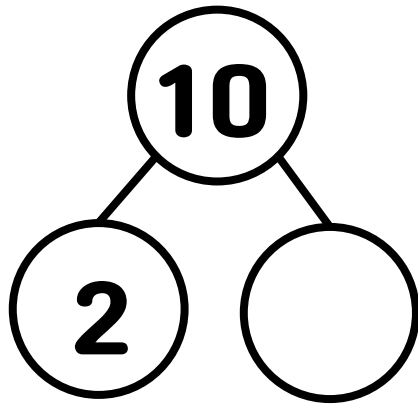
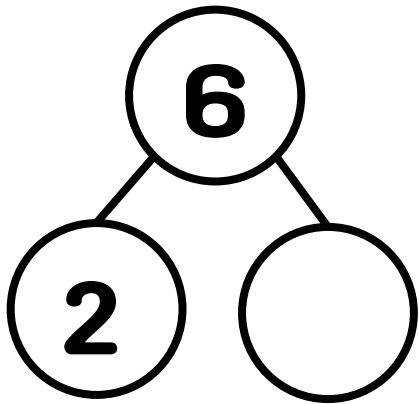
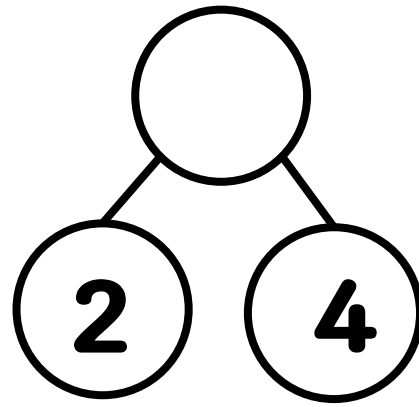

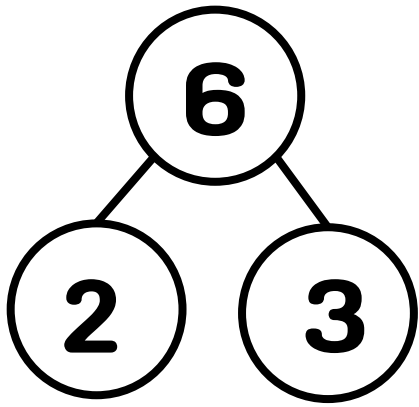
2. Cut

3. Wear

4. Memorize



2의 곱을 생각하며 빈 칸을 채워보세요.



Name: _____

Skip Counting by 3's

Directions: Fill in the hundreds chart by skip counting.

1	2		4	5		7	8		10
11		13	14		16	17		19	20
	22	23		25	26		28	29	
31	32		34	35		37	38		40
41		43	44		46	47		49	50
	52	53		55	56		58	59	
61	62		64	65		67	68		70
71		73	74		76	77		79	80
	82	83		85	86		88	89	
91	92		94	95		97	98		100

$3 \times 1 =$

$3 \times 2 =$

$3 \times 3 =$

$3 \times 4 =$

$3 \times 5 =$

$3 \times 6 =$

$3 \times 7 =$

$3 \times 8 =$

$3 \times 9 =$

$3 \times 10 =$

1. Color

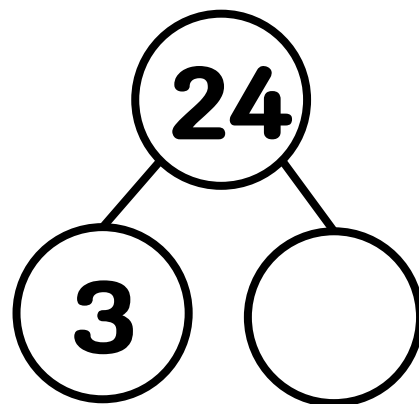
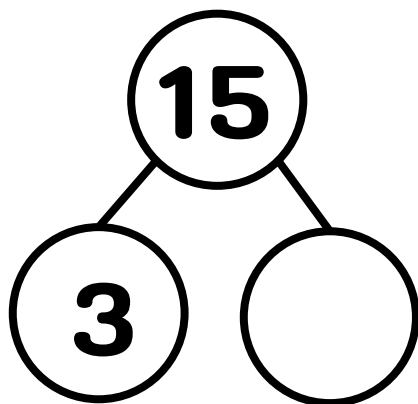
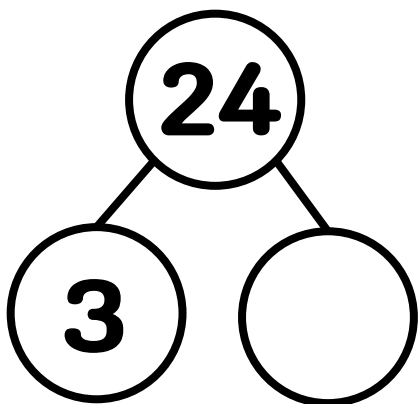
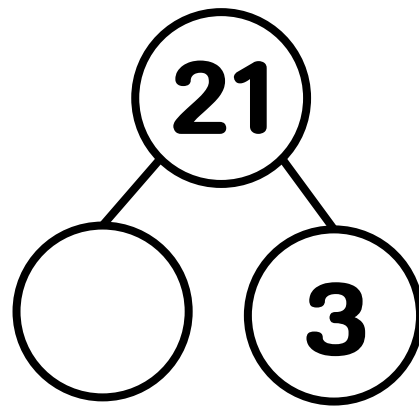
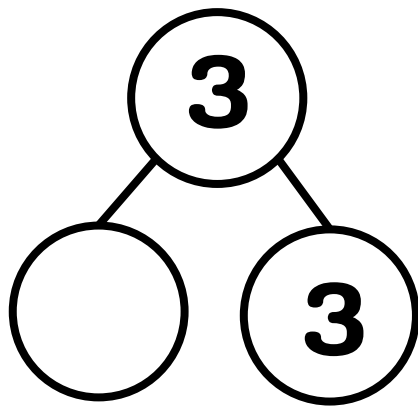
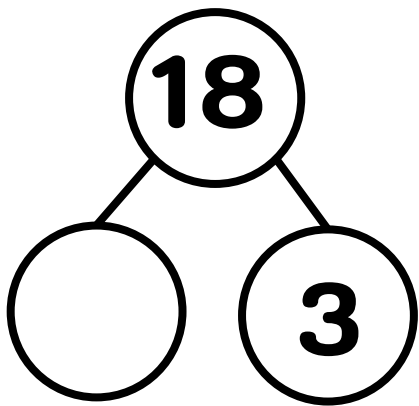
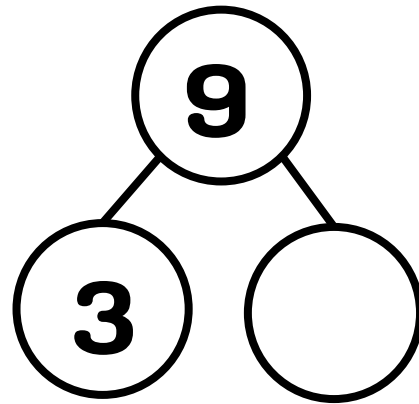
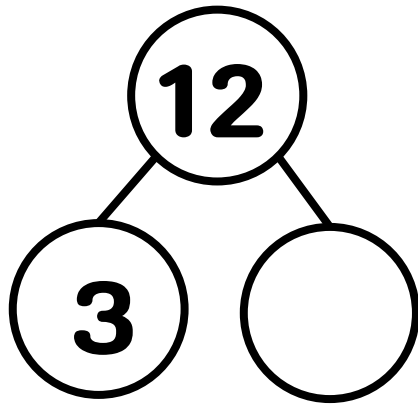
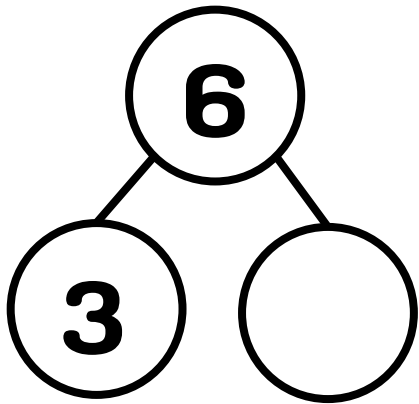
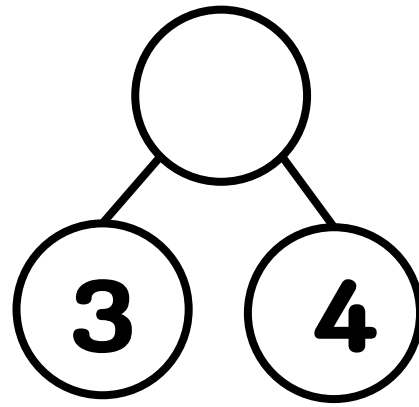
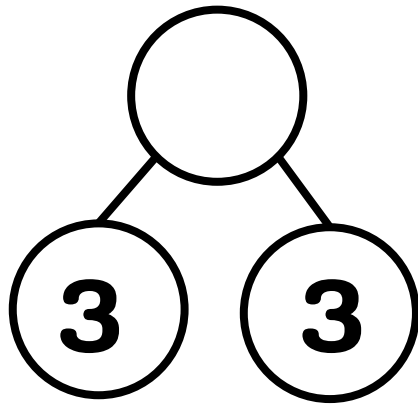
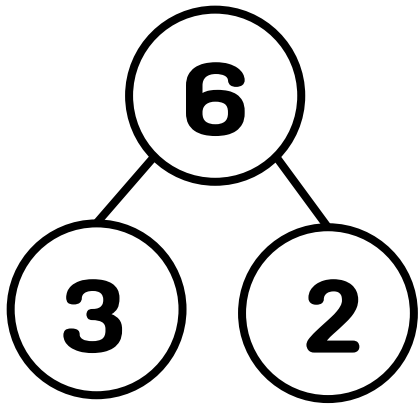
2. Cut

3. Wear

4. Memorize



3의 곱을 생각하며 빈 칸을 채워보세요.



Name: _____

Skip Counting by 4's

Directions: Fill in the hundreds chart by skip counting.

1	2	3		5	6	7		9	10
11		13	14	15		17	18	19	
21	22	23		25	26	27		29	30
31		33	34	35		37	38	39	
41	42	43		45	46	47		49	50
51		53	54	55		57	58	59	
61	62	63		65	66	67		69	70
71		73	74	75		77	78	79	
81	82	83		85	86	87		89	90
91		93	94	95		97	98	99	

$4 \times 1 =$

$4 \times 2 =$

$4 \times 3 =$

$4 \times 4 =$

$4 \times 5 =$

$4 \times 6 =$

$4 \times 7 =$

$4 \times 8 =$

$4 \times 9 =$


$4 \times 10 =$

1. Color

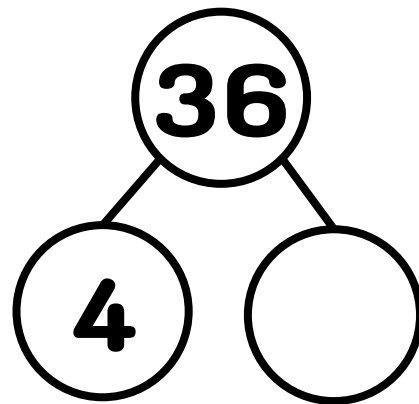
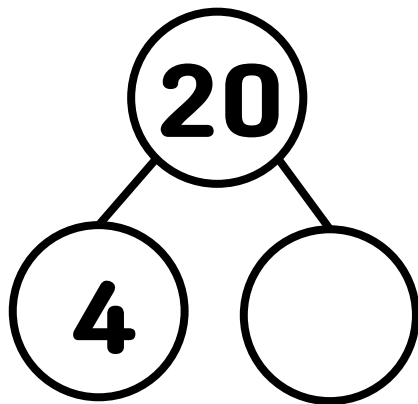
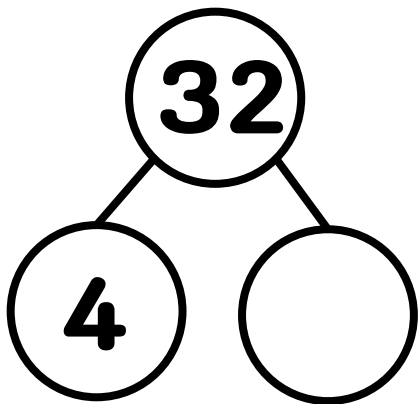
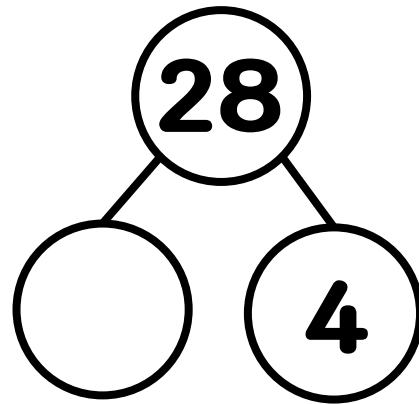
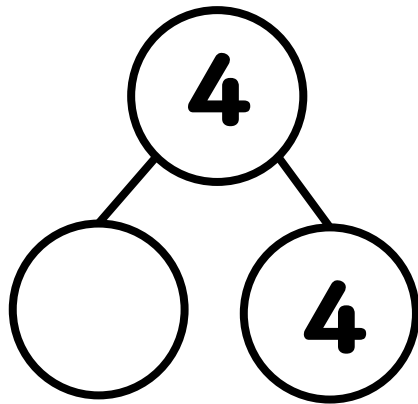
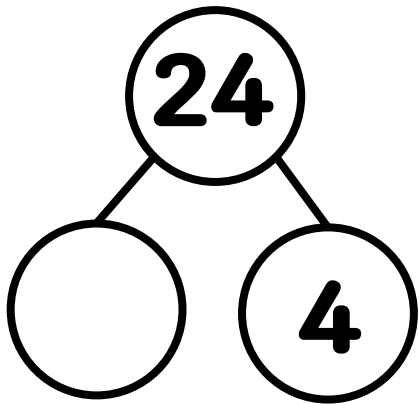
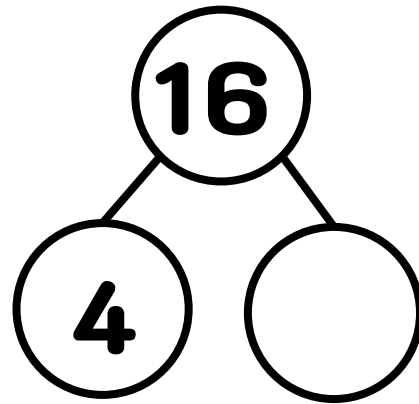
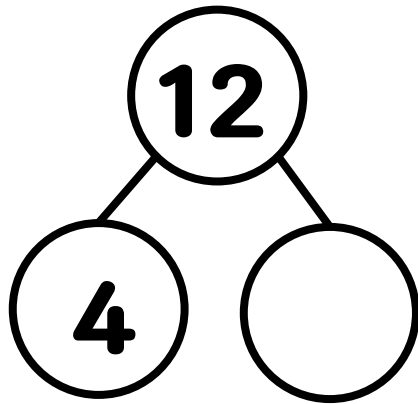
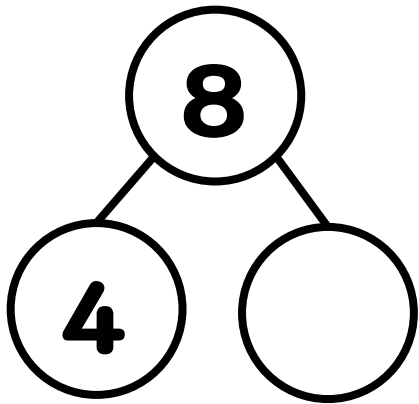
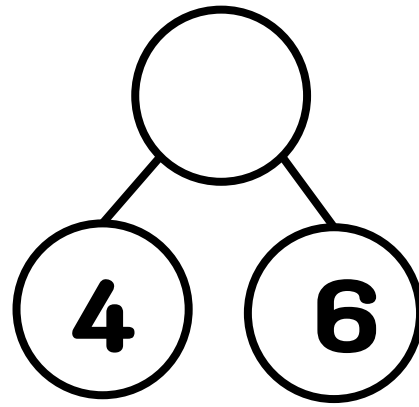
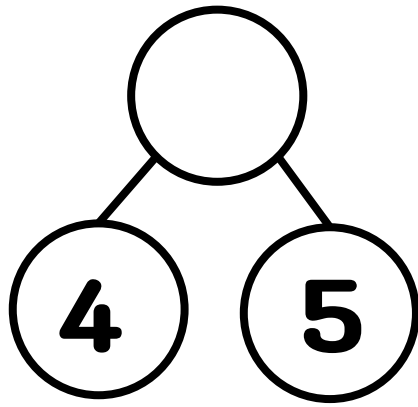
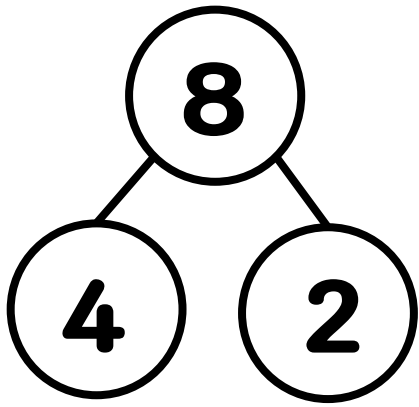
2. Cut

3. Wear

4. Memorize



4의 곱을 생각하며 빈 칸을 채워보세요.



Name: _____

Skip Counting by 5's

Directions: Fill in the hundreds chart by skip counting.

1	2	3	4		6	7	8	9	
11	12	13	14		16	17	18	19	
21	22	23	24		26	27	28	29	
31	32	33	34		36	37	38	39	
41	42	43	44		46	47	48	49	
51	52	53	54		56	57	58	59	
61	62	63	64		66	67	68	69	
71	72	73	74		76	77	78	79	
81	82	83	84		86	87	88	89	
91	92	93	94		96	97	98	99	

$5 \times 1 =$

$5 \times 2 =$

$5 \times 3 =$

$5 \times 4 =$

$5 \times 5 =$

$5 \times 6 =$

$5 \times 7 =$

$5 \times 8 =$

$5 \times 9 =$

$5 \times 10 =$

1. Color

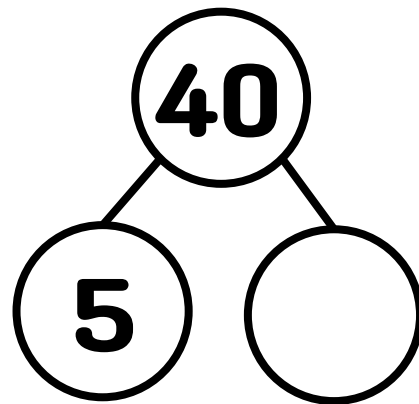
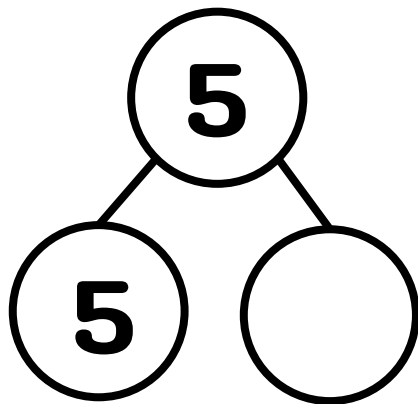
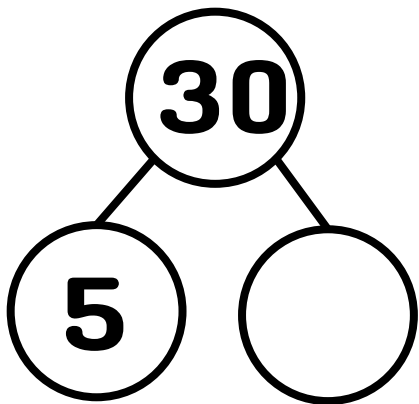
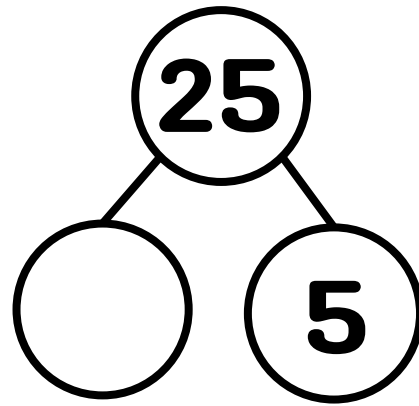
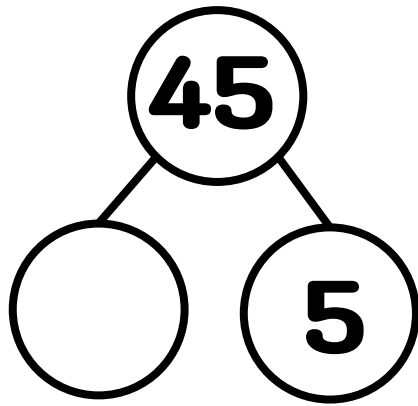
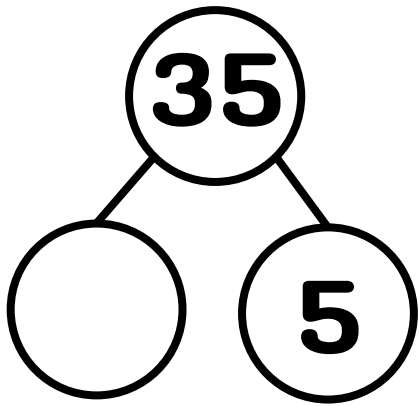
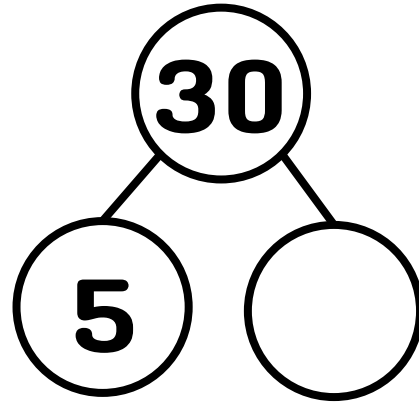
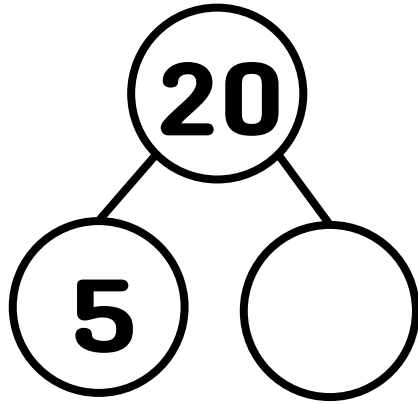
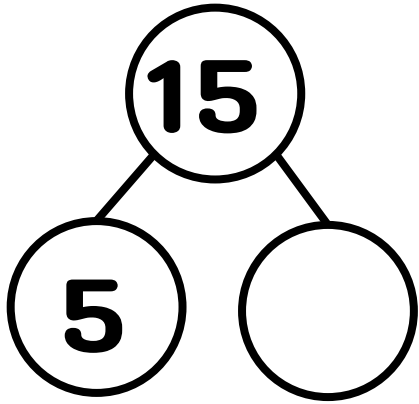
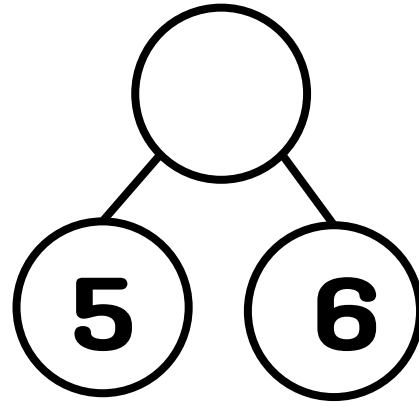
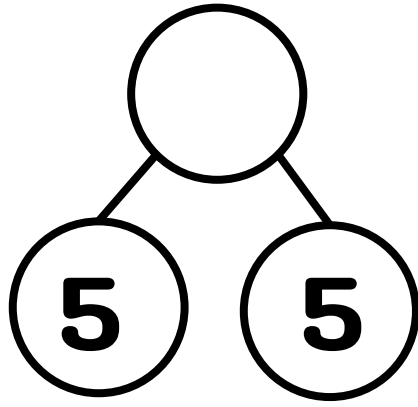
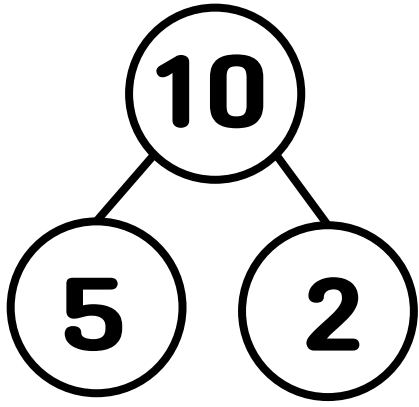
2. Cut

3. Wear

4. Memorize



5의 곱을 생각하며 빈 칸을 채워보세요.



Name: _____

Skip Counting by 6's

Directions: Fill in the hundreds chart by skip counting.

1	2	3	4	5		7	8	9	10
11		13	14	15	16	17		19	20
21	22	23		25	26	27	28	29	
31	32	33	34	35		37	38	39	40
41		43	44	45	46	47		49	50
51	52	53		55	56	57	58	59	
61	62	63	64	65		67	68	69	70
71		73	74	75	76	77		79	80
81	82	83		85	86	87	88	89	
91	92	93	94	95		97	98	99	100

$6 \times 1 =$

$6 \times 2 =$

$6 \times 3 =$

$6 \times 4 =$

$6 \times 5 =$

$6 \times 6 =$


$6 \times 7 =$

$6 \times 8 =$

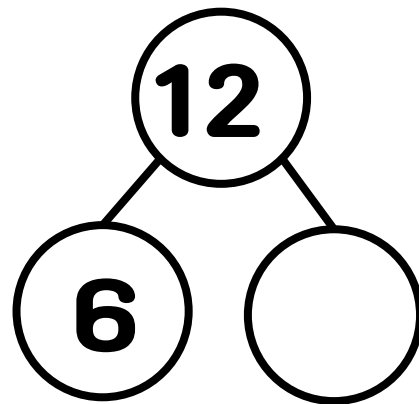
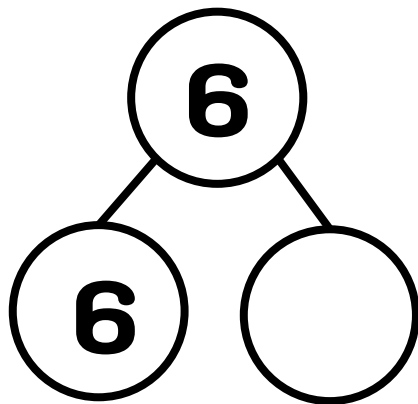
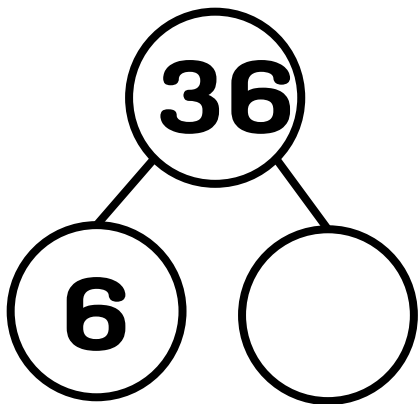
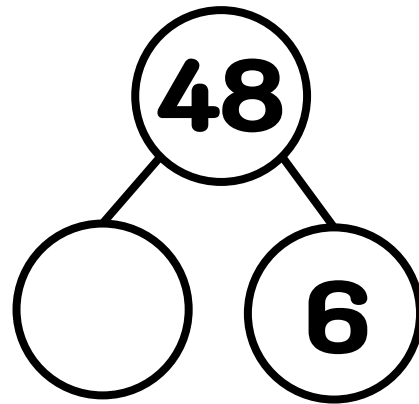
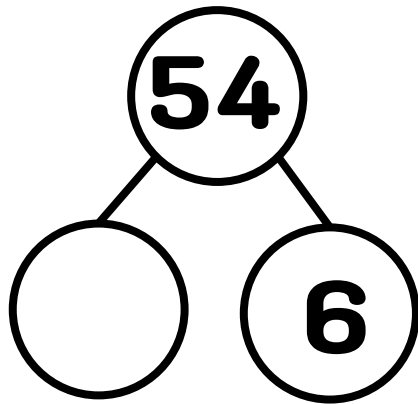
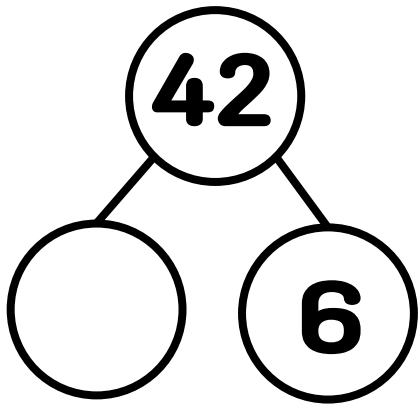
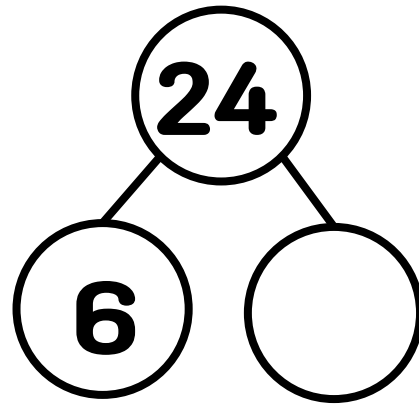
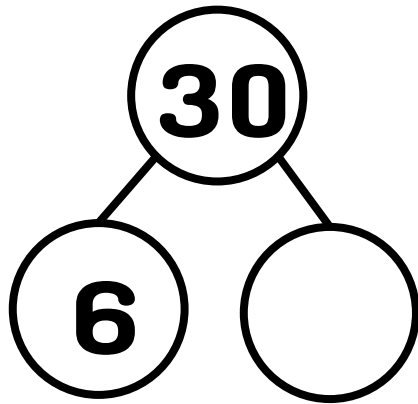
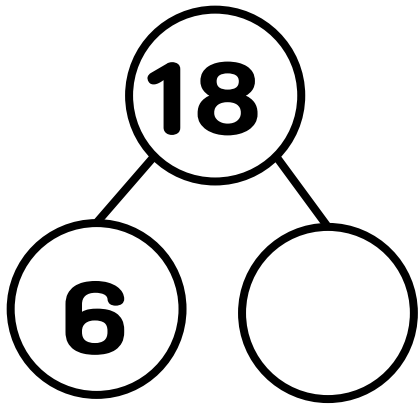
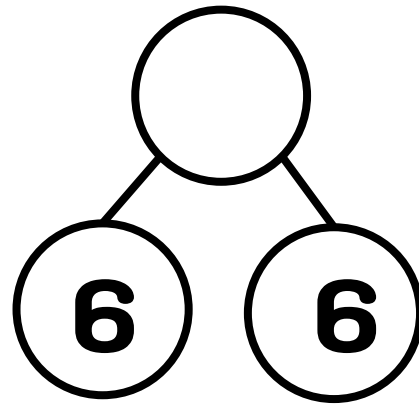
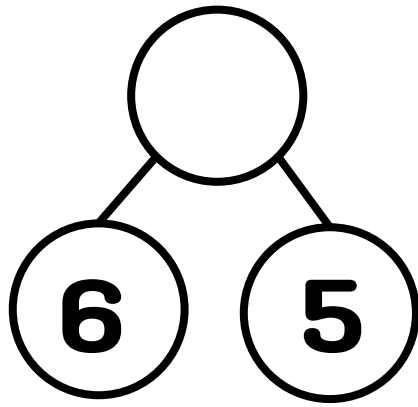
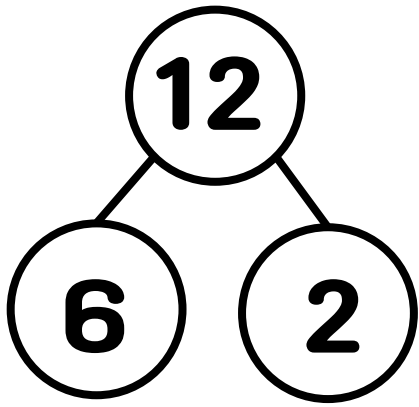
$6 \times 9 =$

$6 \times 10 =$

1. Color
2. Cut
3. Wear
4. Memorize



6의 곱을 생각하며 빈 칸을 채워보세요.



Name: _____

Skip Counting by 7's

Directions: Fill in the hundreds chart by skip counting.

1	2	3	4	5	6		8	9	10
11	12	13		15	16	17	18	19	20
	22	23	24	25	26	27		29	30
31	32	33	34		36	37	38	39	40
41		43	44	45	46	47	48		50
51	52	53	54	55		57	58	59	60
61	62		64	65	66	67	68	69	
71	72	73	74	75	76		78	79	80
81	82	83		85	86	87	88	89	90
	92	93	94	95	96	97		99	100

$7 \times 1 =$

$7 \times 2 =$

$7 \times 3 =$

$7 \times 4 =$

$7 \times 5 =$

$7 \times 6 =$

$7 \times 7 =$

$7 \times 8 =$

$7 \times 9 =$


$7 \times 10 =$

1. Color

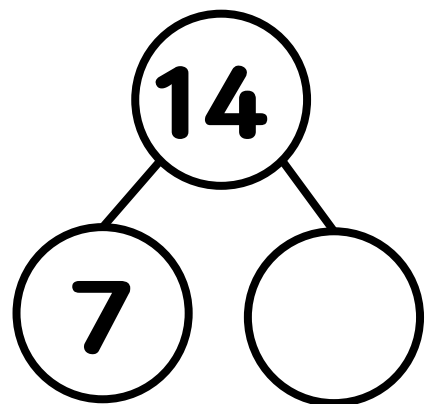
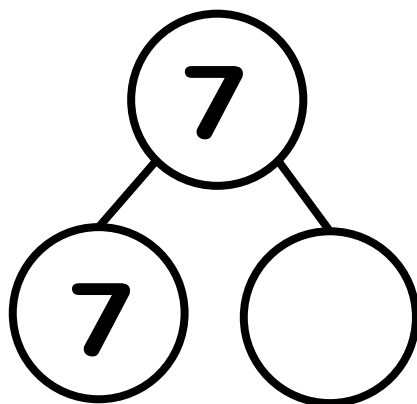
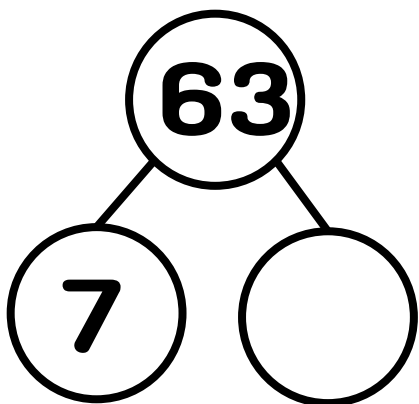
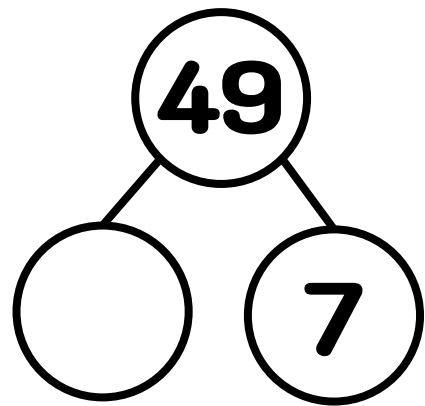
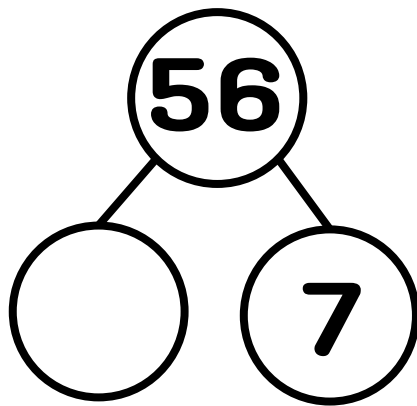
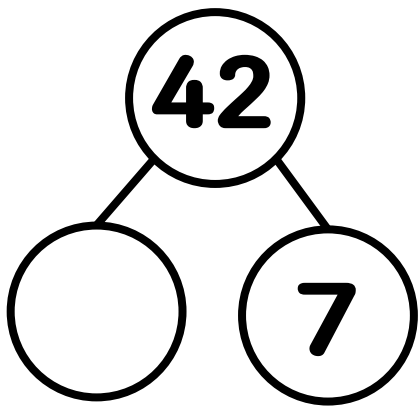
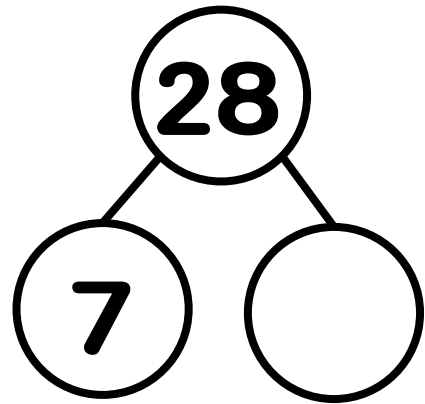
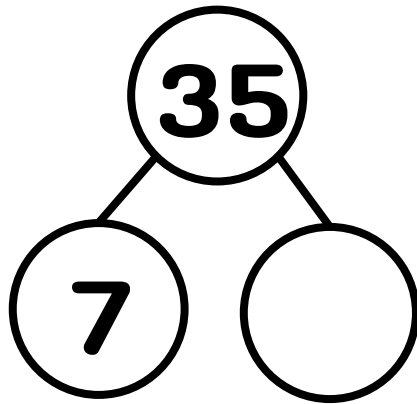
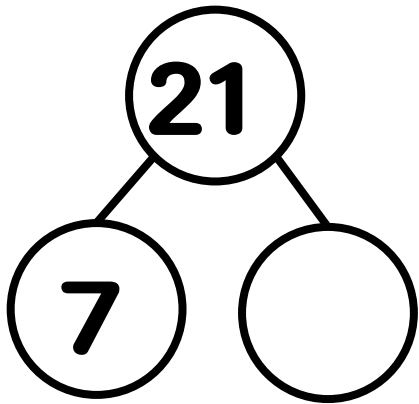

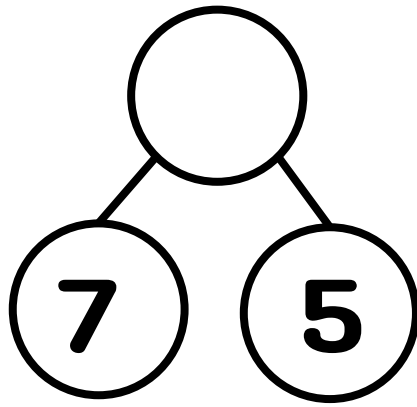
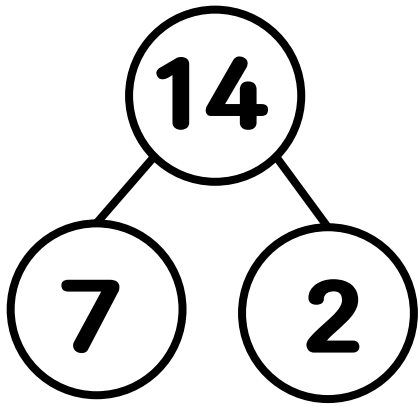
2. Cut

3. Wear

4. Memorize



7의 곱을 생각하며 빈 칸을 채워보세요.




Name: _____

Skip Counting by 8's

Directions: Fill in the hundreds chart by skip counting.

1	2	3	4	5	6	7		9	10
11	12	13	14	15		17	18	19	20
21	22	23		25	26	27	28	29	30
31		33	34	35	36	37	38	39	
41	42	43	44	45	46	47		49	50
51	52	53	54	55		57	58	59	60
61	62	63		65	66	67	68	69	70
71		73	74	75	76	77	78	79	
81	82	83	84	85	86	87		89	90
91	92	93	94	95		97	98	99	100

1. Color
2. Cut
3. Wear
4. Memorize



$8 \times 1 =$

$8 \times 2 =$

$8 \times 3 =$

$8 \times 4 =$

$8 \times 5 =$

$8 \times 6 =$

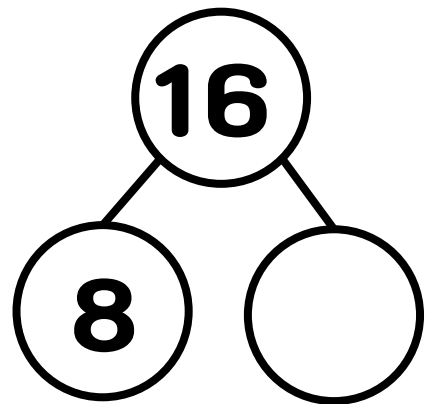
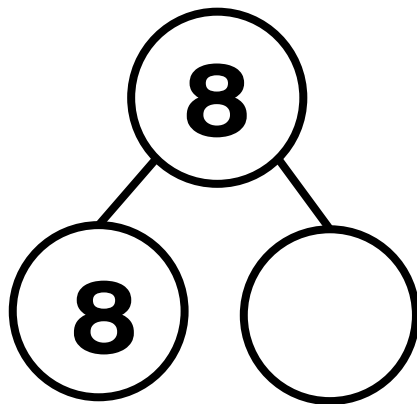
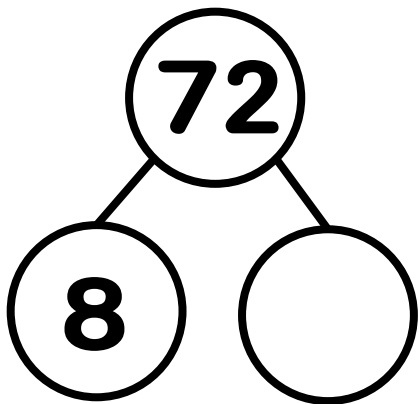
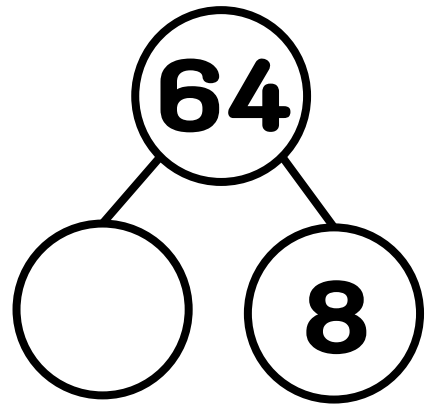
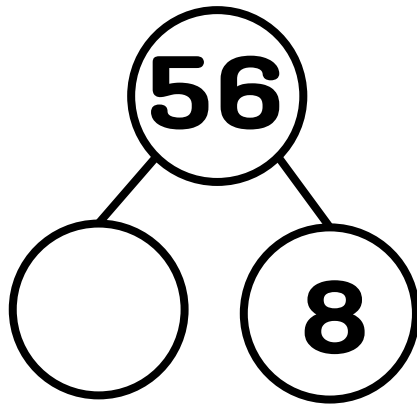
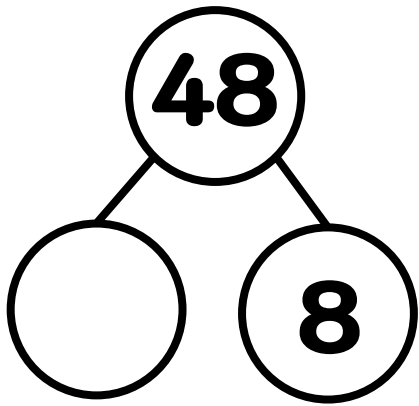
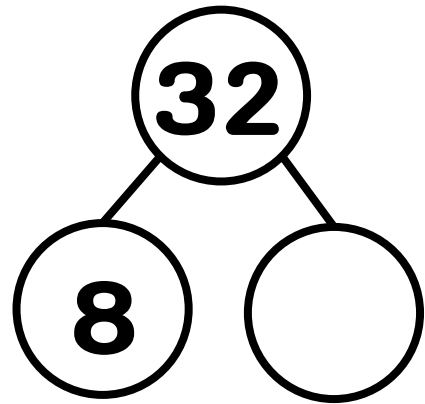
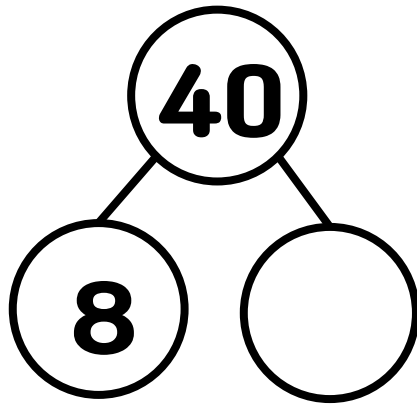
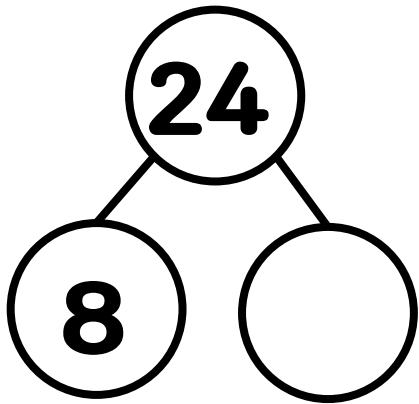

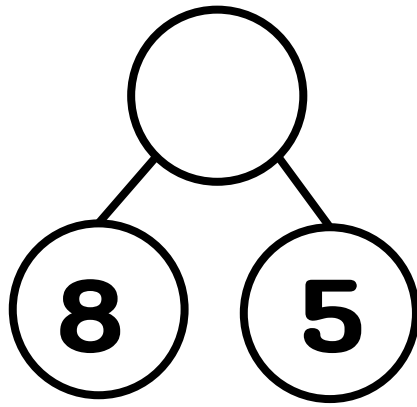
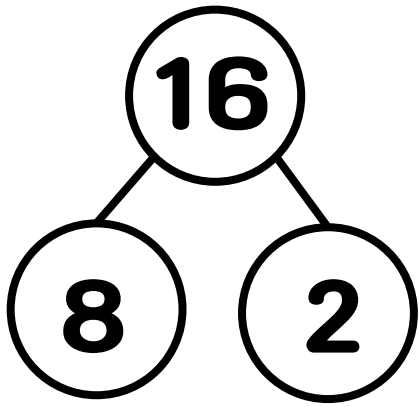
$8 \times 7 =$

$8 \times 8 =$

$8 \times 9 =$

$8 \times 10 =$

8의 곱을 생각하며 빈 칸을 채워보세요.



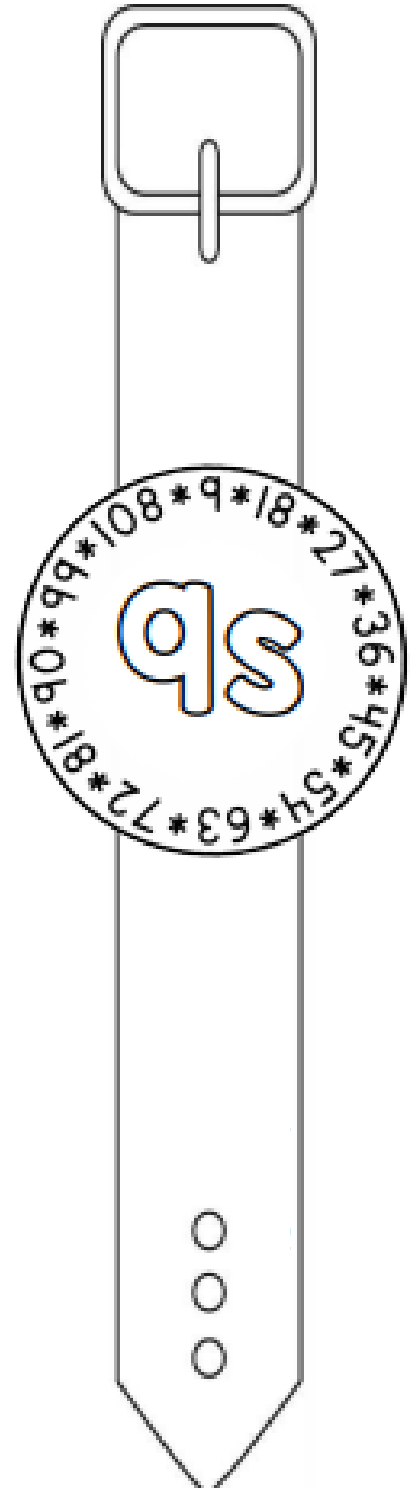
Name: _____

Skip Counting by 9's

Directions: Fill in the hundreds chart by skip counting.

1	2	3	4	5	6	7	8		10
11	12	13	14	15	16	17		19	20
21	22	23	24	25	26		28	29	30
31	32	33	34	35		37	38	39	40
41	42	43	44		46	47	48	49	50
51	52	53		55	56	57	58	59	60
61	62		64	65	66	67	68	69	70
71		73	74	75	76	77	78	79	80
	82	83	84	85	86	87	88	89	
91	92	93	94	95	96	97	98		100

1. Color
2. Cut
3. Wear
4. Memorize



$9 \times 1 =$

$9 \times 2 =$

$9 \times 3 =$

$9 \times 4 =$

$9 \times 5 =$

$9 \times 6 =$

$9 \times 7 =$

$9 \times 8 =$

$9 \times 9 =$

$9 \times 10 =$

9의 곱을 생각하며 빈 칸을 채워보세요.

